



















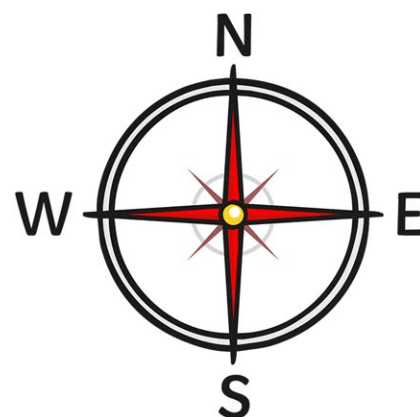


# Compass Directions





















		bakery 			mosque 	
church 		park 		hospital 		
	taxi rank 		post box 			cafe 
fire station 		toy shop 		airport 		
	school 		vets 		pool 	
fair 		police station 				beach 
bus stop 		dentist 	<b>Start</b>		supermarket 	

Compass directions: the town

1. From the start, go north 4 squares. Where are you now?
2. Go east 3 squares. Where are you now?
3. Go south 3 square. Where are you now?
4. Go west 6 squares. Where are you now?
5. Go east 2 squares. Where are you now?
6. Start at the school. How do you get to the taxi rank?
7. Give directions from the dentist to the toy shop.

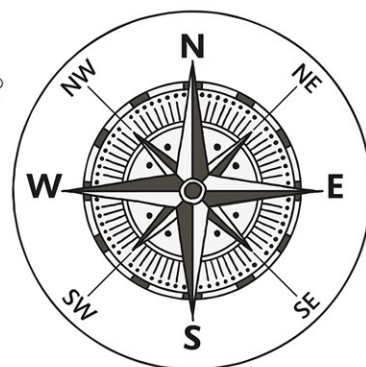


# Compass Directions





















		bakery 			mosque 	
church 		park 		hospital 		
	taxi rank 		post box 			cafe 
fire station 		toy shop 		airport 		
	school 		vets 		pool 	
fair 		police station 				beach 
bus stop 		dentist 	<b>Start</b>		supermarket 	

Compass directions: the town

1. From the start, go north 4 squares and 3 squares east. Where are you now?
2. Go south-west 4 squares and west 2 squares. Where are you now?
3. Go north-east 1 square and east 1 square. Where are you now?
4. Go east 4 squares and north-west 1 square. Where are you now?
5. Go north-west 2 squares and north-east 2 squares.  
Where are you now?
6. Start at the vets. How do you get to the church?
7. Give directions from the park to the pool.
8. Write directions from somewhere on the map to another place.



# Compass Directions

		bakery 			mosque 	
church 		park 		hospital 		
	taxi rank 		post box 			cafe 
fire station 		toy shop 		airport 		
	school 		vets 		pool 	
fair 		police station 				beach 
bus stop 		dentist 	<b>Start</b>		supermarket 	

Compass directions: the town

1. From the start , go NORTH 4 squares. Where are you now?
2. Go NORTH EAST 1 square. Where are you now?
3. Go SOUTH 2 squares. Where are you now?
4. Go WEST 4 squares. Where are you now?
5. Go SOUTH East 2 squares. Where are you now?
6. Start at the school. How do you get to the Fair?
7. Direct someone from the fair to the hospital.
8. Write directions from somewhere on the map to another place.

